


Addition: Adding Objects and Counting On

Home Learning Challenges


There are 5 ladybirds on the leaf. Can you find some more ladybirds hidden around the page? How many are there altogether?



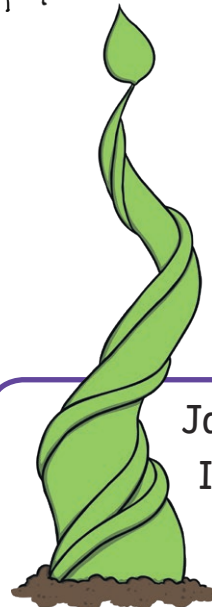

In a football match, Anna's team have scored 3 goals. Then, Anna scores 1 more goal! How many goals have they scored altogether?



There are 6 people on a bus. Then, 2 more people get on. How many people are on the bus altogether? Try drawing a picture to help you work out the answer.



Azmeer has 5 1p coins in his money box. His grandad gives him 4 more 1p coins. How many does Azmeer have altogether? Ask a grown-up to help you find some 1p coins to check your answer.



Jack's beanstalk is 8cm tall. It grows 2cm taller. How tall is Jack's beanstalk?



Freddie Frog is sitting on the number line. If he jumps on two more jumps, which number would he land on?

